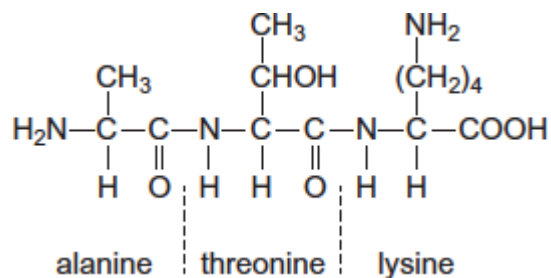


Q1.(a) The tripeptide shown is formed from the amino acids alanine, threonine and lysine.



(i) Draw a separate circle around **each** of the asymmetric carbon atoms in the tripeptide. (1)

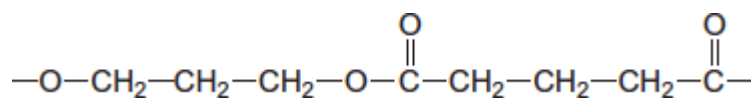
(ii) Draw the zwitterion of alanine. (1)

(iii) Give the IUPAC name of threonine. (1)

.....

(iv) Draw the species formed by lysine at low pH. (1)

(b) The repeating unit shown represents a polyester. (1)



(i) Name this type of polymer.

.....

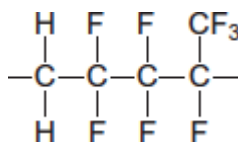
(1)

(ii) Give the IUPAC name for the alcohol used to prepare this polyester.

.....

(1)

(c) The repeating unit shown represents a polyalkene co-polymer. This co-polymer is made from two different alkene monomers.



(i) Name the type of polymerisation occurring in the formation of this co-polymer.

.....

(1)

(ii) Draw the structure of each alkene monomer.

Alkene monomer 1

Alkene monomer 2

(2)

(d) One of the three compounds shown in parts (a), (b) and (c) cannot be broken down by hydrolysis.

Write the letter **(a)**, **(b)** or **(c)** to identify this compound and explain why hydrolysis of this compound does **not** occur.

Compound .....

Explanation .....

.....

.....  
(2)  
(Total 11 marks)

**Q2.** Acyl chlorides and acid anhydrides are important compounds in organic synthesis.

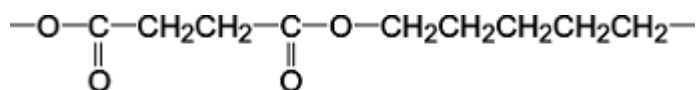
- (a) Outline a mechanism for the reaction of  $\text{CH}_3\text{CH}_2\text{COCl}$  with  $\text{CH}_3\text{OH}$  and name the organic product formed.

Mechanism

Name of organic product .....

(5)

- (b) A polyester was produced by reacting a diol with a diacyl chloride. The repeating unit of the polymer is shown below.



- (i) Name the diol used.

.....

(1)

- (ii) Draw the displayed formula of the diacyl chloride used.

(1)

- (iii) A shirt was made from this polyester. A student wearing the shirt accidentally splashed aqueous sodium hydroxide on a sleeve. Holes later appeared in the

sleeve where the sodium hydroxide had been.

Name the type of reaction that occurred between the polyester and the aqueous sodium hydroxide. Explain why the aqueous sodium hydroxide reacted with the polyester.

Type of reaction .....

Explanation .....

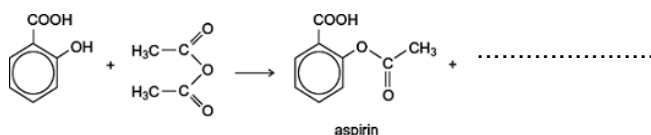
.....

.....

.....

(3)

- (c) (i) Complete the following equation for the preparation of aspirin using ethanoic anhydride by writing the structural formula of the missing product.



(1)

- (ii) Suggest a name for the mechanism for the reaction in part (c)(i).

.....

(1)

- (iii) Give **two** industrial advantages, other than cost, of using ethanoic anhydride rather than ethanoyl chloride in the production of aspirin.

Advantage 1 .....

.....

.....

Advantage 2 .....

.....

.....

(2)



.....

(1)

(f) Phenolphthalein can be used as an indicator in some acid–alkali titrations. The pH range for phenolphthalein is 8.3 – 10.0

(i) For **each** acid.alkali combination in the table below, put a tick (✓) in the box if phenolphthalein could be used as an indicator.

Acid	Alkali	Tick box (✓)
sulfuric acid	sodium hydroxide	
hydrochloric acid	ammonia	
ethanoic acid	potassium hydroxide	
nitric acid	methylamine	

(2)

(ii) In a titration, nitric acid is added from a burette to a solution of sodium hydroxide containing a few drops of phenolphthalein indicator. Give the colour **change** at the end-point.

.....

(1)

(Total 21 marks)

**Q3.** The amide or peptide link is found in synthetic polyamides and also in naturally occurring proteins.

(a) (i) Draw the repeating unit of the polyamide formed by the reaction of propanedioic acid with hexane-1,6-diamine.

(2)

- (ii) In terms of the intermolecular forces between the polymer chains, explain why polyamides can be made into fibres suitable for use in sewing and weaving, whereas polyalkenes usually produce fibres that are too weak for this purpose.

.....  
.....  
.....  
.....  
.....  
.....  
.....

(Extra space) .....  
.....  
.....

(3)

- (b) (i) Name and outline a mechanism for the reaction of  $\text{CH}_3\text{CH}_2\text{COCl}$  with  $\text{CH}_3\text{NH}_2$

Name of mechanism.....

Mechanism

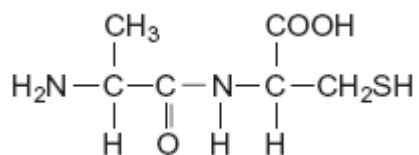
(5)

- (ii) Give the name of the product containing an amide linkage that is formed in the reaction in part (b) (i).

.....

(1)

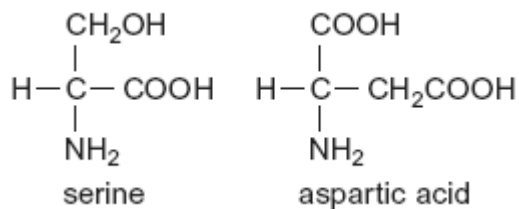
- (c) The dipeptide shown below is formed from two different amino acids.



Draw the structure of the alternative dipeptide that could be formed by these two amino acids.

(1)

- (d) The amino acids serine and aspartic acid are shown below.



- (i) Give the IUPAC name of serine.

.....

(1)



- (ii) Draw the structure of the species formed when aspartic acid reacts with aqueous sodium hydroxide.

(1)

- (iii) Draw the structure of the species formed when serine reacts with dilute hydrochloric acid.

(1)

- (iv) Draw the structure of the species formed when serine reacts with an excess of bromomethane.

(1)

(Total 16 marks)

**Q4.** Common substances used in everyday life often contain organic compounds.

- (a) State an everyday use for each of the following compounds.

- (i)  $\text{CH}_3(\text{CH}_2)_{17}\text{COO}^- \text{Na}^+$  .....

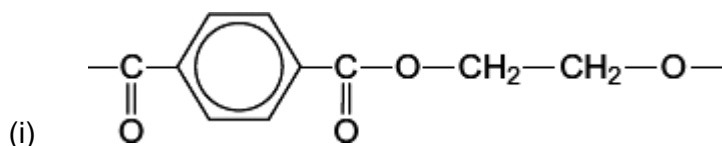
(1)

(ii)  $\text{CH}_3(\text{CH}_2)_{19}\text{COOCH}_3$  ..... (1)

(iii)  $[\text{C}_{16}\text{H}_{33}\text{N}(\text{CH}_3)_3]^+ \text{Br}^-$  ..... (1)

(b) The following structures are the repeating units of two different condensation polymers.

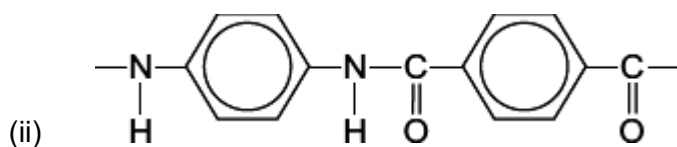
For each example, name the type of condensation polymer. Give a common name for a polymer of this type.



Type of condensation polymer .....

Common name .....

(2)



Type of condensation polymer .....

Common name .....

(2)

(iii) Explain why the polymer in part (b)(ii) has a higher melting point than the polymer in part (b)(i).

.....  
 .....  
 .....

(Extra space) .....

.....

(2)

(Total 9 marks)